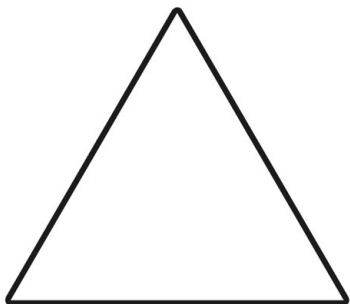



Date _____

Name _____

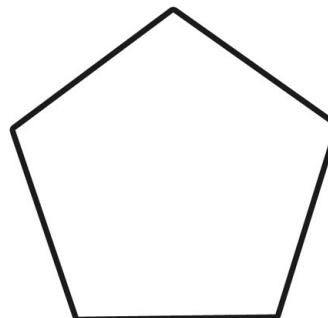
Investigating Lines of Symmetry



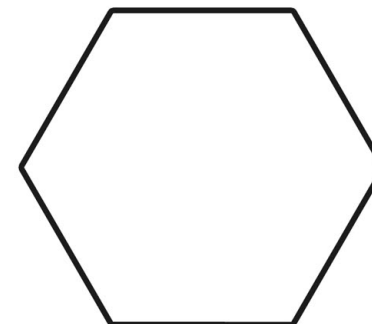
Name _____
Sides _____
Lines of Symmetry _____



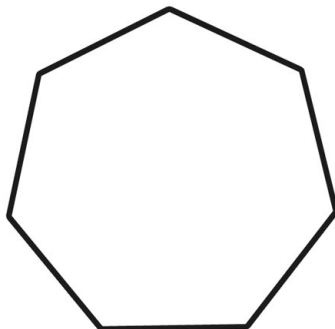
Name _____
Sides _____
Lines of Symmetry _____



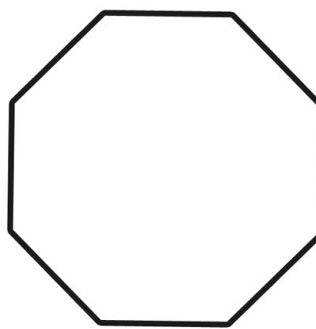
Name _____
Sides _____
Lines of Symmetry _____



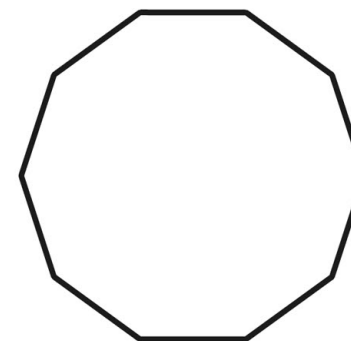
Name _____
Sides _____
Lines of Symmetry _____



Name _____
Sides _____
Lines of Symmetry _____



Name _____
Sides _____
Lines of Symmetry _____

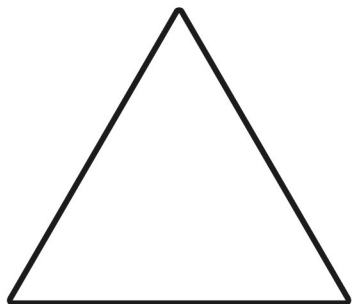


Name _____
Sides _____
Lines of Symmetry _____

Date _____

Name _____


Investigating Lines of Symmetry



Name triangle (equilateral)

Sides 3

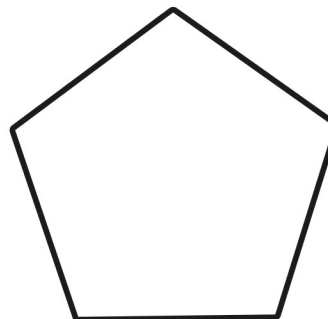
Lines of Symmetry 3



Name square

Sides 4

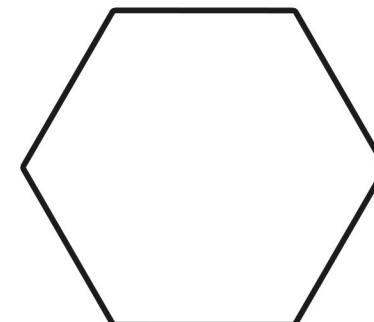
Lines of Symmetry 4



Name pentagon

Sides 5

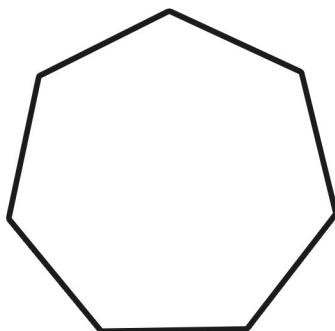
Lines of Symmetry 5



Name hexagon

Sides 6

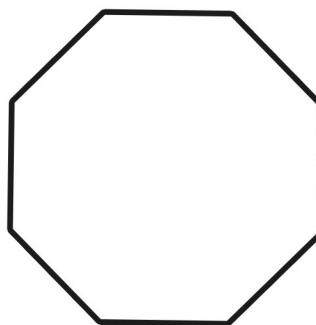
Lines of Symmetry 6



Name heptagon

Sides 7

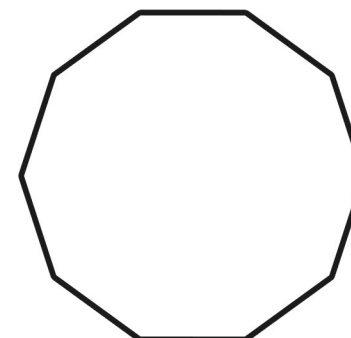
Lines of Symmetry 7



Name octagon

Sides 8

Lines of Symmetry 8



Name decagon

Sides 10

Lines of Symmetry 10