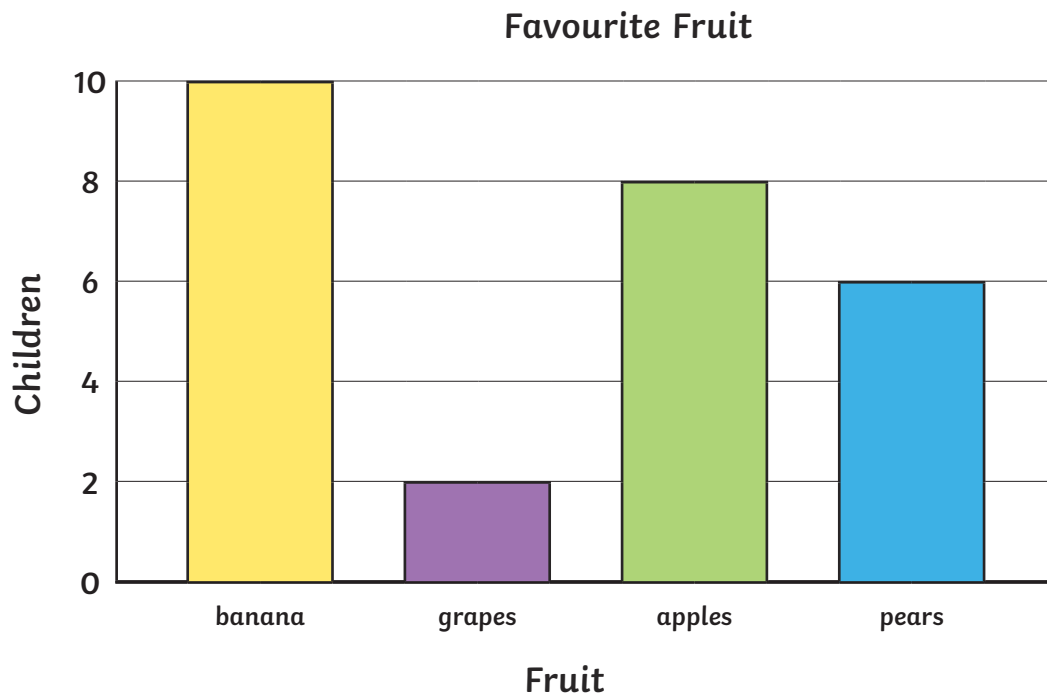


Interpreting Scaled Bar Charts

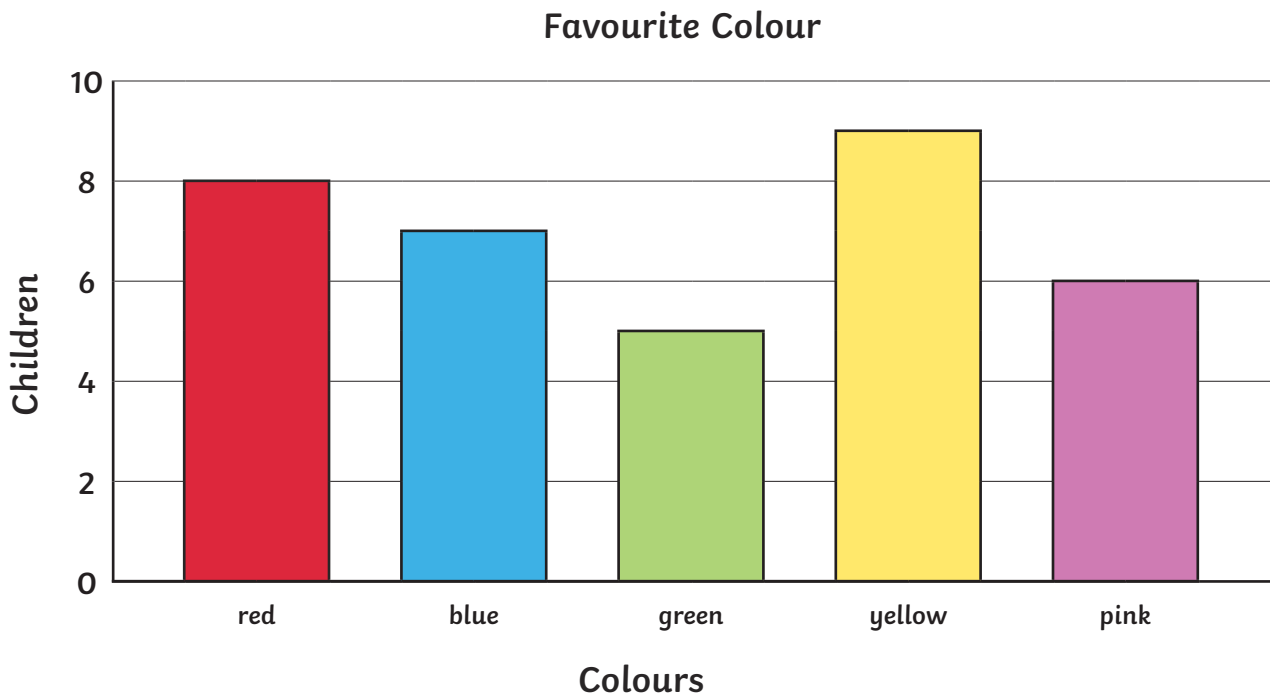


Answer the following questions.

1. What is the favourite fruit? _____
2. How many children chose apples as their favourite fruit? _____
3. How many more children chose bananas than grapes, as their favourite fruit? _____
4. How many children chose apples or pears as their favourite fruit? _____

Write your own questions for a friend.

Interpreting Scaled Bar Charts

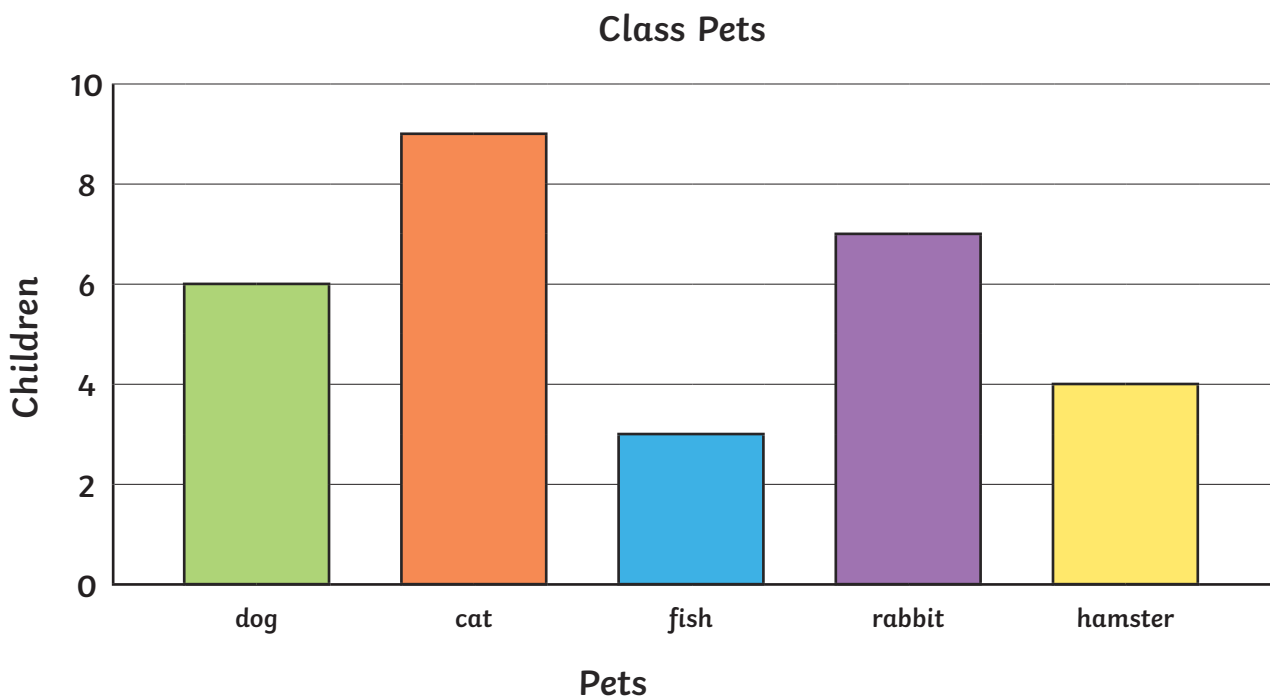


Answer the following questions.

1. What is the least favourite colour? _____
2. How many children chose yellow as their favourite colour? _____
3. How many fewer children chose green than blue, as their favourite colour? _____
4. How many children chose pink or red as their favourite colour? _____

Write your own questions for a friend.

Interpreting Scaled Bar Charts



Answer the following questions.

1. What is the most common pet? _____
2. How many pets are there in the class? _____
3. How many more rabbits than hamster are there? _____
4. How many fewer dogs than cats are there? _____

Write your own questions for a friend.

Interpreting Scaled Bar Charts **Answers**

Favourite Fruit

1. What is the favourite fruit? **Banana**
2. How many children chose apples as their favourite fruit? **8**
3. How many more children chose bananas than grapes, as their favourite fruit? **8**
4. How many children chose apples or pears as their favourite fruit? **14**

Favourite Colour

1. What is the least favourite colour? **green**
2. How many children chose yellow as their favourite colour? **9**
3. How many fewer children chose green than blue, as their favourite colour? **2**
4. How many children chose pink or red as their favourite colour? **14**

Class Pets

1. What is the most common pet? **cat**
2. How many pets are there in the class? **29**
3. How many more rabbits than hamster are there? **3**
4. How many fewer dogs than cats are there? **3**