










# Interpreting a Pictogram

## UK Counties' Population

Greater Manchester	 
South Yorkshire	
West Midlands	
Greater London	    
Kent	

 = 2 million people



1) Which UK county has the greatest population? \_\_\_\_\_

2) What is the approximate population of Greater Manchester? \_\_\_\_\_ million

3) Which UK county has an approximate population of 1 million? \_\_\_\_\_

4) What is the approximate population of Kent and Greater London altogether? \_\_\_\_\_ million












5) Approximately how many fewer people live in South Yorkshire than in Greater Manchester? \_\_\_\_\_ million

6) Approximately, what is the difference between the population of Kent and the population of Greater London? \_\_\_\_\_ million

7) The population of the West Midlands is approximately 3 million. Draw the missing information in the pictogram.

# Interpreting a Pictogram

## UK Counties' Population Answers

Greater Manchester	 
South Yorkshire	
<b>West Midlands</b>	 
Greater London	    
Kent	

 = 2 million people



1) Which UK county has the greatest population?

**Greater London**

2) What is the approximate population of Greater Manchester?

**3 million**

3) Which UK county has an approximate population of 1 million?

**South Yorkshire**

4) What is the approximate population of Kent and Greater London altogether?

**11 million**

5) Approximately how many fewer people live in South Yorkshire than in Greater Manchester?

**2 million**

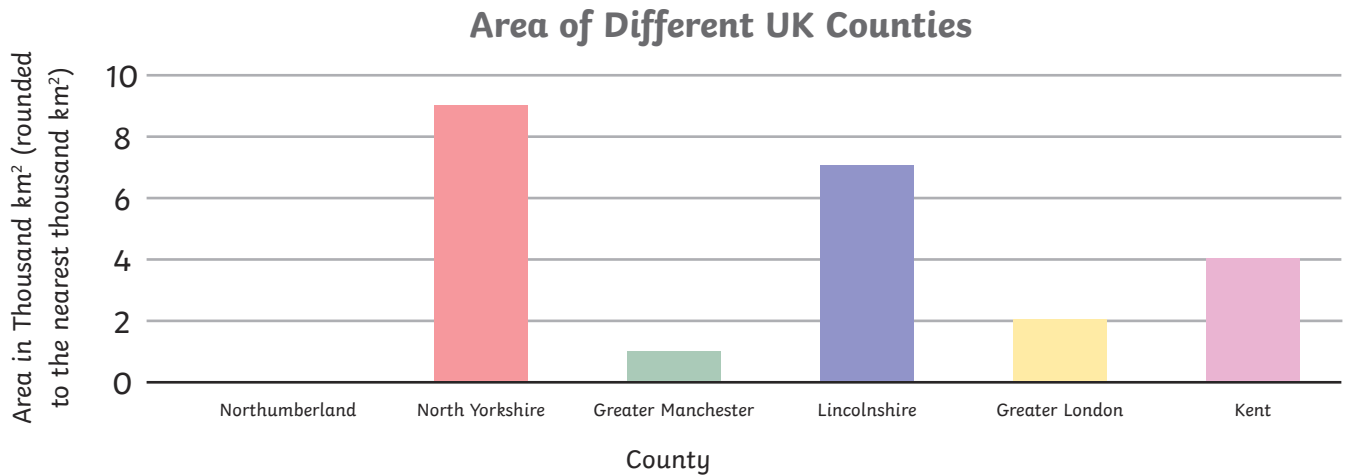
6) Approximately, what is the difference between the population of Kent and the population of Greater London?

**7 million**

7) The population of the West Midlands is approximately 3 million. Draw the missing information in the pictogram.

# Interpreting a Bar Chart

## Area of UK Counties



1) Which is the largest UK county by area? \_\_\_\_\_

2) What is the approximate area of Lincolnshire? \_\_\_\_\_ thousand km<sup>2</sup>

3) Which UK county has an approximate area of 4 thousand square kilometres? \_\_\_\_\_

4) What is the approximate combined area of Greater Manchester and Kent? \_\_\_\_\_ thousand km<sup>2</sup>

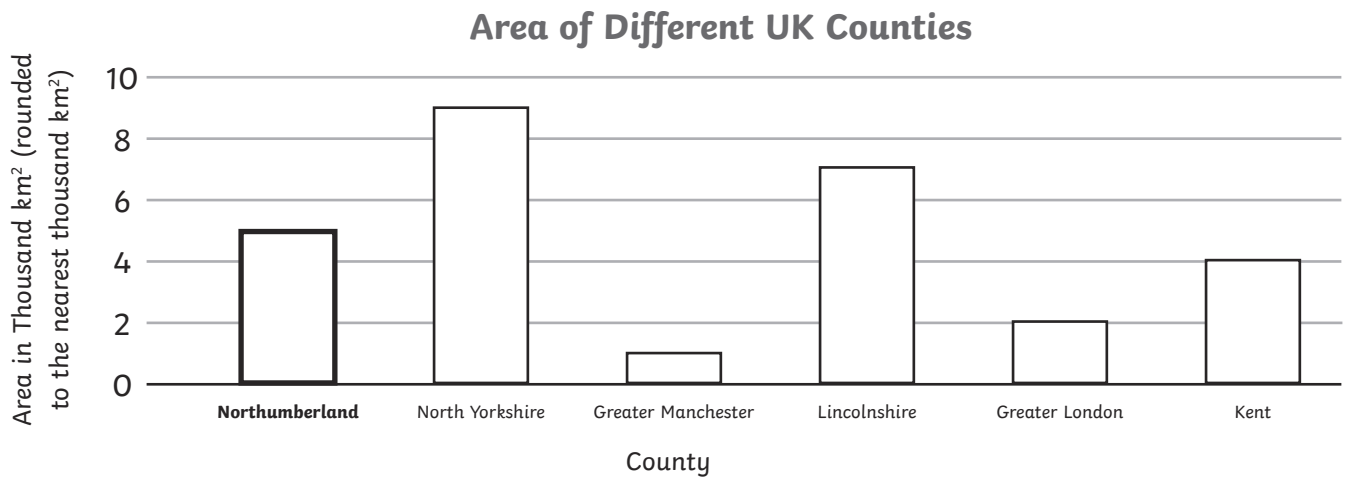
5) Approximately how much bigger is North Yorkshire than Greater London? \_\_\_\_\_ thousand km<sup>2</sup>

6) Approximately, what is the difference between the area of Greater Manchester and the area of Lincolnshire? \_\_\_\_\_ thousand km<sup>2</sup>

7) The area of Northumberland is approximately 5 thousand square kilometres. Draw the missing bar on the bar chart.

# Interpreting a Bar Chart

## Area of UK Counties



1) Which is the largest UK county by area?

**North Yorkshire**

2) What is the approximate area of Lincolnshire?

**7 thousand km<sup>2</sup>**

3) Which UK county has an approximate area of 4 thousand square kilometres?

**Kent**

4) What is the approximate combined area of Greater Manchester and Kent?

**5 thousand km<sup>2</sup>**

5) Approximately how much bigger is North Yorkshire than Greater London?

**7 thousand km<sup>2</sup>**

6) Approximately, what is the difference between the area of Greater Manchester and the area of Lincolnshire?

**6 thousand km<sup>2</sup>**

7) The area of Northumberland is approximately 5 thousand square kilometres. Draw the missing bar on the bar chart.