







































Counting Up and Down in Tenths

Write these tenths in words and numbers. Use your answers to practise counting up and down in tenths.

| Diagram | Words | Numbers |
|--|-----------|----------------|
|  | One Tenth | $\frac{1}{10}$ |
|  | | |
|  | | |
|  | | |
|  | | |
|  | | |
|  | | |
|  | | |
|  | | |
|  | One Whole | 1 |
|  | | |
|  | | |
|  | | |
|  | | |
|  | | |
|  | | |
|  | | |
|  | | |
|  | | |

Counting Up and Down in Tenths

Answers

| Diagram | Words | Numbers |
|--|--------------|----------------|
|  | One Tenth | $\frac{1}{10}$ |
|  | Two Tenths | $\frac{2}{10}$ |
|  | Three Tenths | $\frac{3}{10}$ |
|  | Four Tenths | $\frac{4}{10}$ |
|  | Five Tenths | $\frac{5}{10}$ |
|  | Six Tenths | $\frac{6}{10}$ |
|  | Seven Tenths | $\frac{7}{10}$ |
|  | Eight Tenths | $\frac{8}{10}$ |
|  | Nine Tenths | $\frac{9}{10}$ |
|  | One Whole | 1 |
|  | Nine Tenths | $\frac{9}{10}$ |
|  | Eight Tenths | $\frac{8}{10}$ |
|  | Seven Tenths | $\frac{7}{10}$ |
|  | Six Tenths | $\frac{6}{10}$ |
|  | Five Tenths | $\frac{5}{10}$ |
|  | Four Tenths | $\frac{4}{10}$ |
|  | Three Tenths | $\frac{3}{10}$ |
|  | Two Tenths | $\frac{2}{10}$ |
|  | One Tenth | $\frac{1}{10}$ |